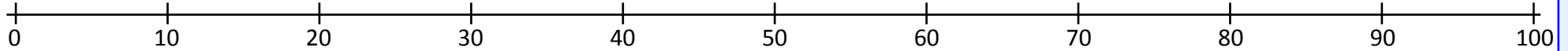


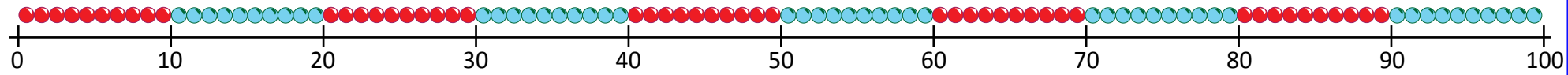
1-100 number grid

1	2	3	4	5	6	7	8	9	10
11	12	13	14	15	16	17	18	19	20
21	22	23	24	25	26	27	28	29	30
31	32	33	34	35	36	37	38	39	40
41	42	43	44	45	46	47	48	49	50
51	52	53	54	55	56	57	58	59	60
61	62	63	64	65	66	67	68	69	70
71	72	73	74	75	76	77	78	79	80
81	82	83	84	85	86	87	88	89	90
91	92	93	94	95	96	97	98	99	100

0-100 landmarked number line



0-100 beaded number line



1 2 3 4 5 6 7 8 9 10 11 12 13 14 15 16 17 18 19 20 21 22 23 24 25 26 27 28 29 30
31 32 33 34 35 36 37 38 39 40 41 42 43 44 45 46 47 48 49 50
100 99 98 97 96 95 94 93 92 91 90 89 88 87 86 85 84 83 82 81
80 79 78 77 76 75 74 73 72 71 70 69 68 67 66 65 64 63 62 61 60 59 58 57 56 55 54 53 52 51

Inequalities

Right or wrong?

$34 < 87$

$29 > 12$

$76 > 75$

$12 > 21$

$45 > 33$

$14 < 38$

$65 > 88$

$75 > 67$

$27 > 13$

$29 < 39$

What am I?

1	2	3	4	5	6	7	8	9	10
11	12	13	14	15	16	17	18	19	20
21	22	23	24	25	26	27	28	29	30
31	32	33	34	35	36	37	38	39	40
41	42	43	44	45	46	47	48	49	50

I am less than 40.
I am more than 20.
I am in the ten times table.
What am I?

I am more than 10.
I am less than 20.
I am an odd number.
My two digits add up to 6.
What am I?

Work out the secret meeting spot!

T h e y a r e r e a d i n g b o o k s .

15th 4th

1st 2nd 3rd

16th 5th 18th

1st 6th 3rd 3rd

Who will be at the secret meeting?


T h e y a r e r e a d i n g b o o k s .

8th 4th 5th 13th

1st 12th 13th 5th

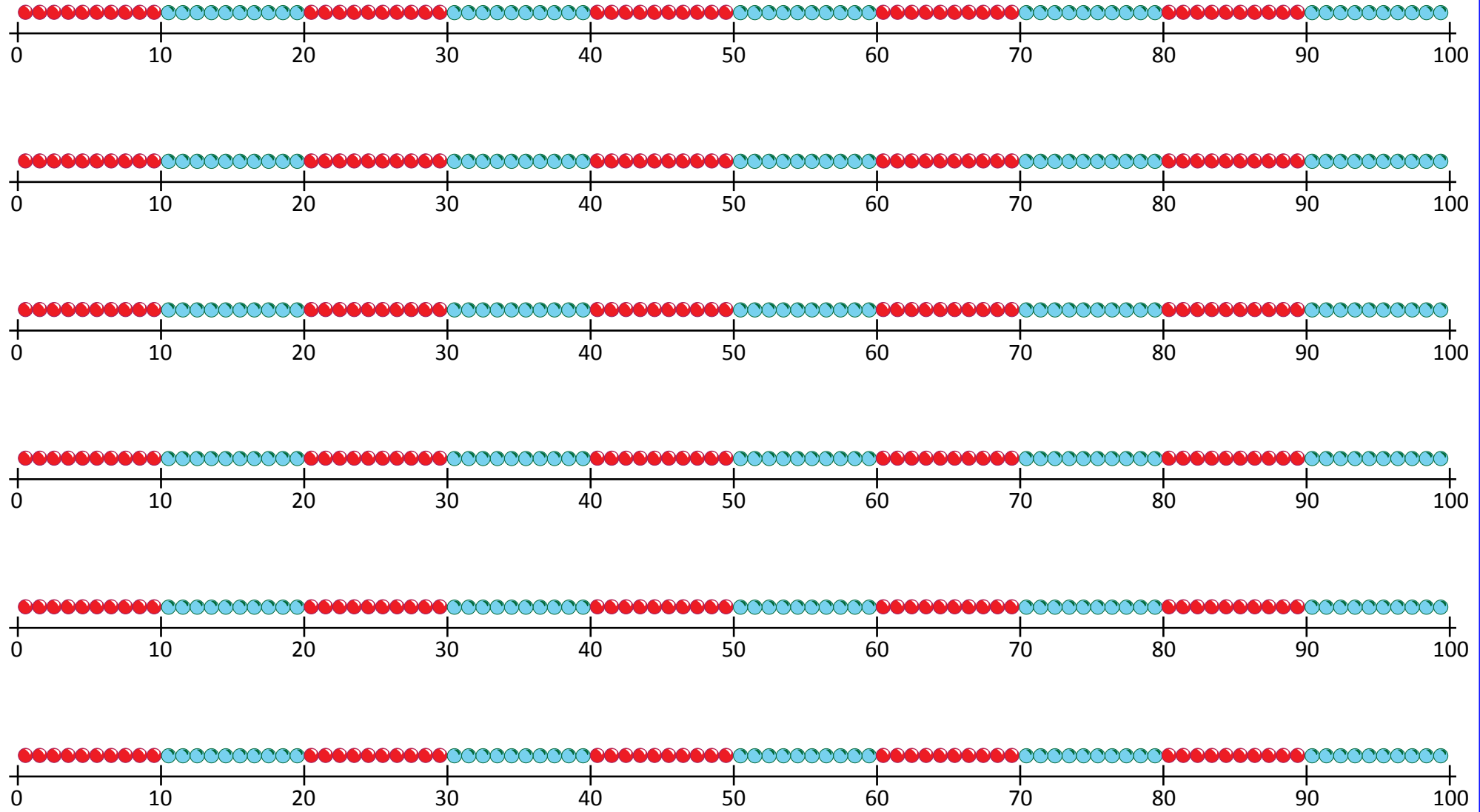
15th 3rd 13th

0-100 landmarked number lines



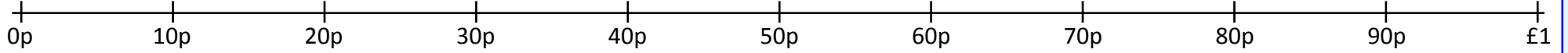
1 2 3 4 5 6 7 8 9 10 11 12 13 14 15 16 17 18 19 20 21 22 23 24 25 26 27 28 29 30
31 32 33 34 35 36 37 38 39 40 41 42 43 44 45 46 47 48 49 50
100 99 98 97 96 95 94 93 92 91 90 89 88 87 86 85 84 83 82 81
80 79 78 77 76 75 74 73 72 71 70 69 68 67 66 65 64 63 62 61 60 59 58 57 56 55 54 53 52 51

0-100 beaded number lines



1 2 3 4 5 6 7 8 9 10 11 12 13 14 15 16 17 18 19 20 21 22 23 24 25 26 27 28 29 30
31 32 33 34 35 36 37 38 39 40 41 42 43 44 45 46 47 48 49 50
100 99 98 97 96 95 94 93 92 91 90 89 88 87 86 85 84 83 82
80 79 78 77 76 75 74 73 72 71 70 69 68 67 66 65 64 63 62 61 60 59 58 57 56 55 54 53 52 51

0 - £1 landmarked line



1 2 3 4 5 6 7 8 9 10 11 12 13 14 15 16 17 18 19 20 21 22 23 24 25 26 27 28 29 30

100 99 98 97 96 95 94 93 92 91 90 89 88 87 86 85 84 83 82

31 32 33 34 35 36 37 38 39 40 41 42 43 44 45 46 47 48 49 50

80 79 78 77 76 75 74 73 72 71 70 69 68 67 66 65 64 63 62 61 60 59 58 57 56 55 54 53 52 51

0 - £1 landmarked line



1 2 3 4 5 6 7 8 9 10 11 12 13 14 15 16 17 18 19 20 21 22 23 24 25 26 27 28 29 30

100 99 98 97 96 95 94 93 92 91 90 89 88 87 86 85 84 83 82

31 32 33 34 35 36 37 38 39 40 41 42 43 44 45 46 47 48 49 50

80 79 78 77 76 75 74 73 72 71 70 69 68 67 66 65 64 63 62 61 60 59 58 57 56 55 54 53 52 51

Maths Answers - Spring Year 2

Week 1:

Inequalities

Inequalities	
	Right or wrong?
$34 < 87$	<input checked="" type="checkbox"/>
$29 > 12$	<input checked="" type="checkbox"/>
$76 > 75$	<input checked="" type="checkbox"/>
$12 > 21$	<input type="checkbox"/>
$45 > 33$	<input checked="" type="checkbox"/>
$14 < 38$	<input checked="" type="checkbox"/>
$65 > 88$	<input type="checkbox"/>
$75 > 67$	<input checked="" type="checkbox"/>
$27 > 13$	<input checked="" type="checkbox"/>
$29 < 39$	<input checked="" type="checkbox"/>

© Hamilton Trust Y2 Spr Week 1 Day 1

What am I?

30

15

Work out the secret meeting spot!

BY THE OAK TREE

Who will be at the secret meeting?

RYAN

TINA

BEN